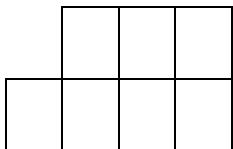


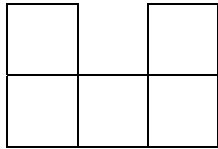
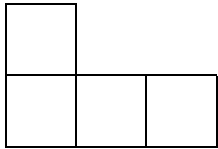


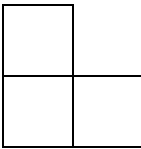

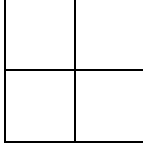
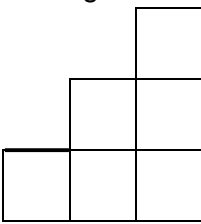



Identifying views of 3-D models

Grade 5 Geometry Worksheet

Check the boxes with the correct views.
(You might need to check more than one box.)

	<ul style="list-style-type: none"> ▪ Front view  	<ul style="list-style-type: none"> ▪ Left view  	<ul style="list-style-type: none"> ▪ Right view 
	<ul style="list-style-type: none"> ▪ Front view  	<ul style="list-style-type: none"> ▪ Back view  	<ul style="list-style-type: none"> ▪ Left view 
	<ul style="list-style-type: none"> ▪ Front view  	<ul style="list-style-type: none"> ▪ Left view  	<ul style="list-style-type: none"> ▪ Right view 
	<ul style="list-style-type: none"> ▪ Left view  	<ul style="list-style-type: none"> ▪ Right view  	<ul style="list-style-type: none"> ▪ Back view 
	<ul style="list-style-type: none"> ▪ Left view <input type="checkbox"/> 	<ul style="list-style-type: none"> ▪ Left view <input type="checkbox"/> 	<ul style="list-style-type: none"> ▪ Right view <input type="checkbox"/>