

NUMERALS & QUANTITY

LABORATORY · L3

Numeral Formation • Build

Objective: *See, trace, and write each numeral.*

DO THIS Trace each numeral. Say its name.


TRACE THE NUMERALS Trace each numeral carefully.



WRITE IT YOURSELF Now write each numeral.

□ □ □ □ □ □

COUNT AND WRITE Write the number for each group.



I can: read it trace it write it

TEACHER EDITION

NUMERALS & QUANTITY

LABORATORY · L3

Numeral Formation • Build

Objective: *See, trace, and write each numeral.*


DO THIS Trace each numeral. Say its name.


TRACE THE NUMERALS Trace each numeral carefully.




WRITE IT YOURSELF Now write each numeral.

COUNT AND WRITE Write the number for each group.

1  → **5**

2  → **1**

3  → **7**

4  → **1**

TEACHER NOTES Answer key & guidance

Answers: see page
Common error: A model that does not match the labelled number.

Strategy: Have the child build the model before recording.
Prompt: "Show me how you know."

I can: read it trace it write it

