


**Dividing shapes into equal parts**


Divide each shape into the number of equal parts shown.  
Remember, all parts must be identical.




halves (2 parts)



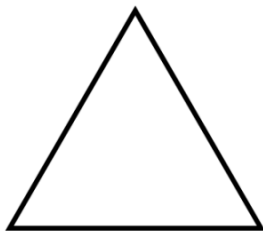
thirds (3 parts)




quarters (4 parts)



quarters (4 parts)



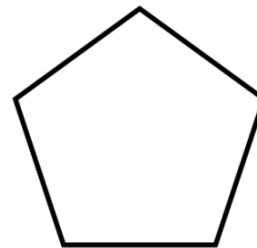
halves (2 parts)



eighths (8 parts)



halves (2 parts)



fifths (5 parts)