

DATA & GRAPHS

LABORATORY • LII

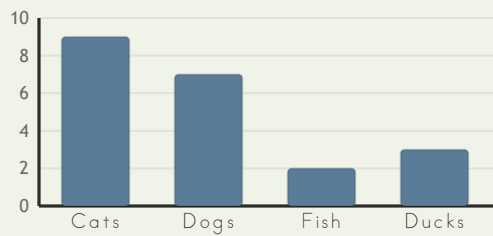
Picture Graphs • Explore

Objective: *Sort and graph, then read the graph.*

DO THIS Count each group. Compare the columns.


DISCOVER A graph shows how many in each group.

EXAMPLE



Most: Cats
Fewest: Fish

PICTURE GRAPH Each circle is one.



To compare I used: the columns counting the key

TEACHER EDITION

DATA & GRAPHS

LABORATORY • LII

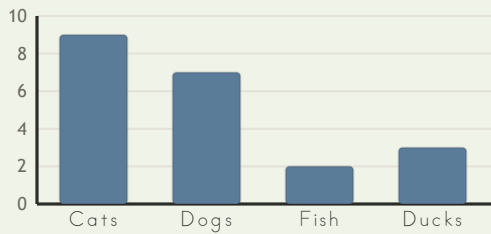
Picture Graphs • Explore

Objective: *Sort and graph, then read the graph.*

DO THIS Count each group. Compare the columns.


DISCOVER A graph shows how many in each group.

EXAMPLE



Most: Cats
Fewest: Fish

PICTURE GRAPH Each circle is one.



TEACHER NOTES Answer key & guidance

Answers: see page
Common error: Counting objects more than once or skipping objects.

Strategy: Introduce with the manipulatives named below.
Prompt: "Show me how you know."

To compare I used: the columns counting the key

