

COUNTING & CARDINALITY

QUARTER 1 • WEEK 3

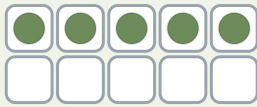
Count 1 to 3 • Model

Objective: *Show each quantity on a ten frame.*

DO THIS Fill the frame, then write the number.

MODEL One counter in each box.

EXAMPLE



5

BUILD THE NUMBER Fill the frame to match.

1



2



3



4



COUNT AND WRITE Count each set. Write how many.

1



→

2



→

3



→

4



→

I counted by: touching each saying the last number checking twice

COUNTING & CARDINALITY


Count 1 to 3 • Model

Objective: Show each quantity on a ten frame.

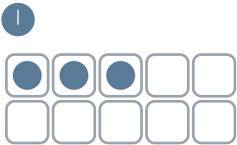
DO THIS Fill the frame, then write the number.

MODEL One counter in each box.

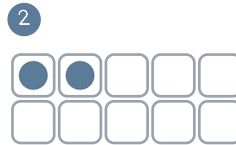
EXAMPLE



BUILD THE NUMBER Fill the frame to match.



3



2




1



1

COUNT AND WRITE Count each set. Write how many.



TEACHER NOTES Answer key & guidance

Answers: see page
Common error: A model that does not match the labelled number.

Strategy: Have the child build the model before recording.
Prompt: "Show me how you know."

I counted by: touching each saying the last number checking twice