

## COMPARISON & EQUALITY

QUARTER 2 • WEEK 12

Compare Within 10 • Fluency


Objective: *Build quick recall with related facts.*


**DO THIS** Complete each set. Look for the pattern.


**STRATEGY** Use what you already know.


Related facts help you remember.

**FACT SETS** Match each group to its numeral

1  →

2  →

3  →

4  →

**FACT SETS** One more than each number

$0 + 1 = \square$

$1 + 1 = \square$

$2 + 1 = \square$

$3 + 1 = \square$

$4 + 1 = \square$

$5 + 1 = \square$

$6 + 1 = \square$

$7 + 1 = \square$

**NUMBER TRACK** Fill in the missing numbers.

1  2  3   6  7  8  10

**ACCURACY CHECK** How did you do?

Correct:  Corrected:



TEACHER EDITION

## COMPARISON & EQUALITY

QUARTER 2 • WEEK 12

Compare Within 10 • Fluency


Objective: *Build quick recall with related facts.*


**DO THIS** Complete each set. Look for the pattern.


**STRATEGY** Use what you already know.


Related facts help you remember.

**FACT SETS** Match each group to its numeral

1  →

2  →

3  →

4  →

**FACT SETS** One more than each number

$0 + 1 = \underline{1}$

$1 + 1 = \underline{2}$

$2 + 1 = \underline{3}$

$3 + 1 = \underline{4}$

$4 + 1 = \underline{5}$

$5 + 1 = \underline{6}$

$6 + 1 = \underline{7}$

$7 + 1 = \underline{8}$

**NUMBER TRACK** Fill in the missing numbers.

1

2

3

4

5

6

7

8

9

10

**ACCURACY CHECK** How did you do?

Correct:

Corrected:

