

## MEASUREMENT & TIME

QUARTER 3 • WEEK 26

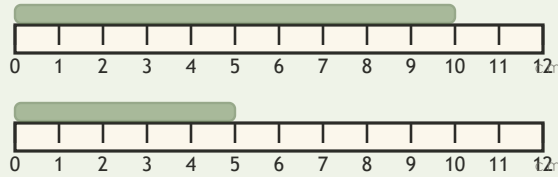
Measurement and Data • Model

Objective: *Compare lengths directly.*

**DO THIS** Find which is longer and which is shorter.

**DISCOVER** Line up the ends to compare.

**EXAMPLE**

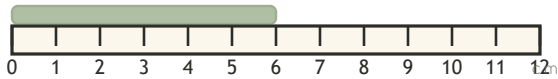


$$10 > 5$$

10 cm is longer

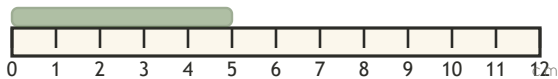
**COMPARE LENGTHS** Longer or shorter?

1



Longer or shorter than 5 cm?

2



Longer or shorter than 3 cm?

I compared:  length  time  value

TEACHER EDITION

## MEASUREMENT & TIME

QUARTER 3 • WEEK 26

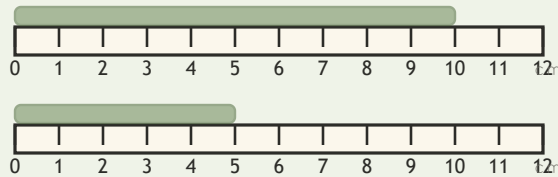
Measurement and Data • Model

Objective: *Compare lengths directly.*

**DO THIS** Find which is longer and which is shorter.

**DISCOVER** Line up the ends to compare.

**EXAMPLE**

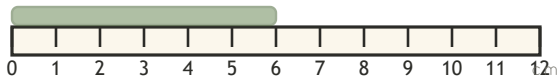


$$10 > 5$$

10 cm is longer

**COMPARE LENGTHS** Longer or shorter?

1



Longer or shorter than 5 cm?

2



Longer or shorter than 3 cm?

**TEACHER NOTES** Answer key & guidance

Answers: see page  
Common error: A model that does not match the labelled number.

Strategy: Have the child build the model before recording.  
Prompt: "Show me how you know."

I compared:  length  time  value

