

GEOMETRY & SHAPES


LABORATORY · L8

Shape Composition • Apply

Objective: *Find shapes around us.*

DO THIS Name each shape.

APPLY Shapes are everywhere.



NAME THE SHAPE Match the shape to its name.

1




square

2



star

3



circle

4



diamond

I named shapes by: sides corners how they look

TEACHER EDITION

GEOMETRY & SHAPES


LABORATORY • L8

Shape Composition • Apply

Objective: *Find shapes around us.*

DO THIS Name each shape.

APPLY Shapes are everywhere.



NAME THE SHAPE Match the shape to its name.

1




square

2



star

3



circle

4



diamond

TEACHER NOTES Answer key & guidance

Answers: see page

Strategy: Read each situation aloud; let the child interpret first.

Common error: Choosing an operation before understanding the situation.

Prompt: "Show me how you know."

I named shapes by: sides corners how they look

