

COMPARISON & EQUALITY

QUARTER 1 • WEEK 7

More, Fewer, Same • Fluency


Objective: *Build quick recall with related facts.*


DO THIS Complete each set. Look for the pattern.


STRATEGY Use what you already know.


Related facts help you remember.

FACT SETS Match each group to its numeral

1  →

2  →

3  →

4  →

FACT SETS One more than each number

$0 + 1 = \square$

$1 + 1 = \square$

$2 + 1 = \square$

$3 + 1 = \square$

$4 + 1 = \square$

NUMBER TRACK Fill in the missing numbers.

2 3 5 6 7 8 10

ACCURACY CHECK How did you do?

Correct: Corrected:



TEACHER EDITION

COMPARISON & EQUALITY

QUARTER 1 • WEEK 7

More, Fewer, Same • Fluency


Objective: *Build quick recall with related facts.*


DO THIS Complete each set. Look for the pattern.


STRATEGY Use what you already know.


Related facts help you remember.

FACT SETS Match each group to its numeral

1  → 3

2  → 5

3  → 2

4  → 5

FACT SETS One more than each number

$0 + 1 = \underline{1}$

$1 + 1 = \underline{2}$

$2 + 1 = \underline{3}$

$3 + 1 = \underline{4}$

$4 + 1 = \underline{5}$

NUMBER TRACK Fill in the missing numbers.

1 2 3 4 5 6 7 8 9 10

ACCURACY CHECK How did you do?

Correct: Corrected:

