





KINDERGARTEN MASTERY ASSESSMENT 2 OF 8 · QUARTER 1

Quarter 1 • Numerals & Ordering





Objective: *Show what you can do on your own.*

DO THIS Work on your own. Do your best thinking.

COUNT AND WRITE Write the number for each group.

1  → <input type="text"/>	2  → <input type="text"/>
3  → <input type="text"/>	4  → <input type="text"/>

CIRCLE THE NUMBER Circle the matching number.

1  0 2 4	2  0 1 4
3  1 3 4	4  2 3 4



TEACHER EDITION

KINDERGARTEN MASTERY

ASSESSMENT 2 OF 8 · QUARTER 1

Quarter 1 • Numerals & Ordering

Objective: *Show what you can do on your own.*

DO THIS Work on your own. Do your best thinking.

COUNT AND WRITE Write the number for each group.

1  →

2  →

3  →

4 →

CIRCLE THE NUMBER Circle the matching number.

1  0 2 4

2  0 4

3  1 3 4

4  2 3 4

TEACHER NOTES Answer key & guidance

Answers: see page
Common error: Treating the picture and the symbol as unrelated.

Strategy: Link the model to the numeral or equation aloud.
Prompt: "Show me how you know."

