

MATH REVIEW

Final Mastery Assessment • Connect

Objective: *Review addition.*

DO THIS Find each sum.

ADD Find each sum.

1 $7 + 3 = \square$

2 $9 + 1 = \square$

3 $7 + 2 = \square$


4 $2 + 8 = \square$


5 $6 + 1 = \square$


6 $2 + 2 = \square$

COUNT AND WRITE Write how many.

1  →

2  →

3  →

4  →

I feel: ready almost need help

TEACHER EDITION

MATH REVIEW

QUARTER 4 • WEEK 36

Final Mastery Assessment • Connect

Objective: *Review addition.*

DO THIS Find each sum.

ADD Find each sum.

1 $7 + 3 = \underline{10}$

2 $9 + 1 = \underline{10}$




3 $7 + 2 = \underline{9}$

4 $2 + 8 = \underline{10}$

5 $6 + 1 = \underline{7}$

6 $2 + 2 = \underline{4}$

COUNT AND WRITE Write how many.



TEACHER NOTES Answer key & guidance

Answers: see page
Common error: Treating the picture and the symbol as unrelated.

Strategy: Link the model to the numeral or equation aloud.
Prompt: "Show me how you know."

I feel: ready almost need help