

KINDERGARTEN MASTERY

ASSESSMENT 2 OF 8 • QUARTER 3


Quarter 3 • Numerals & Ordering

Objective: *Show what you can do on your own.*


DO THIS Work on your own. Do your best thinking.

COUNT AND WRITE Write the number for each group.


1




2



3



4




CIRCLE THE NUMBER Circle the matching number.

1



4 8 16

2




12 13 15

3



1 5 10

4



3 14 19

TEACHER EDITION

KINDERGARTEN MASTERY


ASSESSMENT 2 OF 8 • QUARTER 3


Quarter 3 • Numerals & Ordering


Objective: *Show what you can do on your own.*


DO THIS Work on your own. Do your best thinking.

COUNT AND WRITE Write the number for each group.

1  →

2  →

3  →


4  →

CIRCLE THE NUMBER Circle the matching number.

1  4 8 16

2  12 13 15

3  1 5

4  3 14 19

TEACHER NOTES Answer key & guidance

Answers: see page
Common error: Treating the picture and the symbol as unrelated.

Strategy: Link the model to the numeral or equation aloud.
Prompt: "Show me how you know."