

GEOMETRY & SHAPES

QUARTER 3 • WEEK 27

Geometry and Review • Model

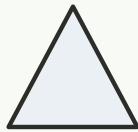
Objective: *Name shapes by their sides and corners.*

DO THIS Name each shape. Count its sides.

DISCOVER Shapes have sides and corners.




rectangle



triangle



square



circle

COUNT THE SIDES Write how many sides.

1



sides:

2




sides:

3



sides:

4



sides:

I named shapes by: sides corners how they look

TEACHER EDITION

GEOMETRY & SHAPES

QUARTER 3 • WEEK 27

Geometry and Review • Model

Objective: *Name shapes by their sides and corners.*

DO THIS Name each shape. Count its sides.

DISCOVER Shapes have sides and corners.




rectangle



triangle



square



circle

COUNT THE SIDES Write how many sides.



sides: 4



sides: 3



sides: 4



sides: 0

TEACHER NOTES Answer key & guidance

Answers: see page
Common error: A model that does not match the labelled number.

Strategy: Have the child build the model before recording.
Prompt: "Show me how you know."

I named shapes by: sides corners how they look

