


## COUNT THE SCENE

Find, Count, and Graph


Objective: Find and count each kind, then show them on the graph.

**DO THIS** Find and count each kind of animal. Write the totals and compare.


**THE SCENE** Find every one and count carefully.






**COUNT AND GRAPH** Write how many, then color one box per object.

 =

 =

 =

	1	2	3	4	5	6	7	8	9	10
										
										
										

**COMPARE** Use your counts.

How many more cat than bird?  $9 - 8 =$   How many in all?

To find them I:  looked carefully  counted each  checked twice

TEACHER EDITION


## COUNT THE SCENE

Find, Count, and Graph

Objective: Find and count each kind, then show them on the graph.


**DO THIS** Find and count each kind of animal. Write the totals and compare.


**THE SCENE** Find every one and count carefully.



**COUNT AND GRAPH** Write how many, then color one box per object.

 = 9

 = 8

 = 9

	1	2	3	4	5	6	7	8	9	10
										
										
										

**COMPARE** Use your counts.

How many more cat than bird?  $9 - 8 = \underline{1}$  How many in all? 26

**TEACHER NOTES** Answer key & guidance

Answers: (cat: 9, 'bird': 8, 'flower': 9)  
Common error: Counting one twice

Strategy: Cross off each as you count  
Prompt: "Did you find them all?"

To find them I:  looked carefully  counted each  checked twice