

NUMERALS & QUANTITY

QUARTER 1 • WEEK 6

Numerals 4 and 5 • Fluency

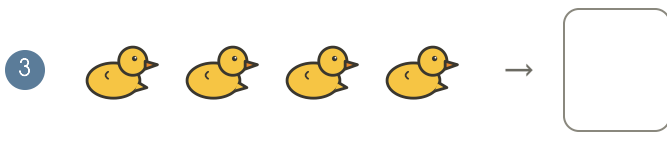

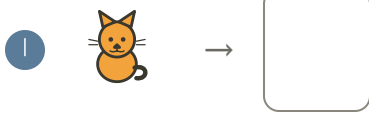
Objective: *Build quick recall with related facts.*

DO THIS Complete each set. Look for the pattern.

STRATEGY Use what you already know.

Related facts help you remember.

FACT SETS Match each group to its numeral



FACT SETS One more than each number

$0 + 1 = \square$

$1 + 1 = \square$

$2 + 1 = \square$

$3 + 1 = \square$

$4 + 1 = \square$

NUMBER TRACK Fill in the missing numbers.



ACCURACY CHECK How did you do?

Correct: Corrected:



TEACHER EDITION

NUMERALS & QUANTITY

QUARTER 1 • WEEK 6

Numerals 4 and 5 • Fluency

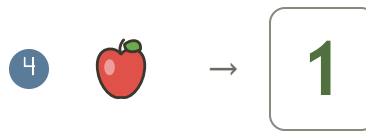
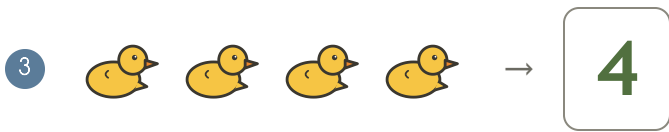

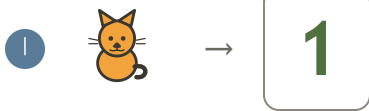
Objective: *Build quick recall with related facts.*

DO THIS Complete each set. Look for the pattern.

STRATEGY Use what you already know.

Related facts help you remember.

FACT SETS Match each group to its numeral



FACT SETS One more than each number

$0 + 1 = \underline{1}$

$1 + 1 = \underline{2}$

$2 + 1 = \underline{3}$

$3 + 1 = \underline{4}$

$4 + 1 = \underline{5}$

NUMBER TRACK Fill in the missing numbers.



ACCURACY CHECK How did you do?

Correct: Corrected:

