


### Rectangles - area and perimeter

Grade 5 Geometry Worksheet

Find the perimeter and area of each rectangle.



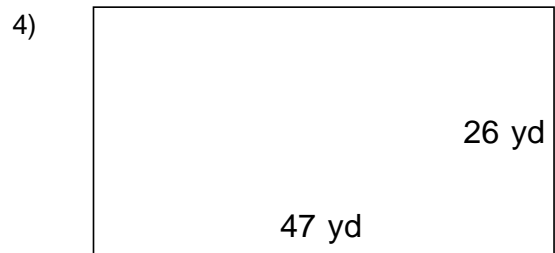
\_\_\_\_\_



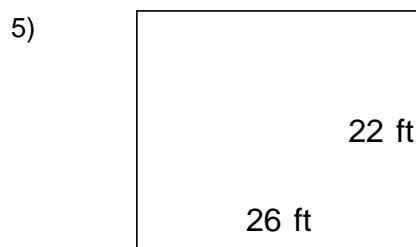
\_\_\_\_\_



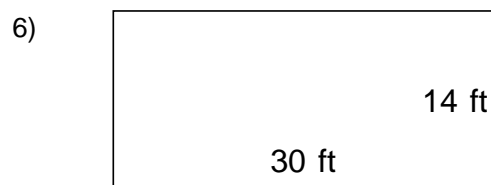
\_\_\_\_\_



\_\_\_\_\_



\_\_\_\_\_



\_\_\_\_\_

