

COMPARISON & EQUALITY

QUARTER 1 • WEEK 7

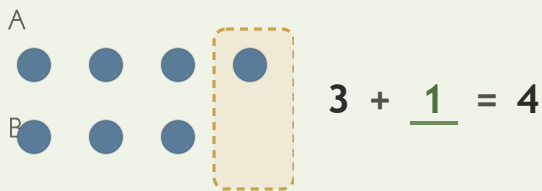
More, Fewer, Same • Prove

Objective: *Make two groups equal to check.*

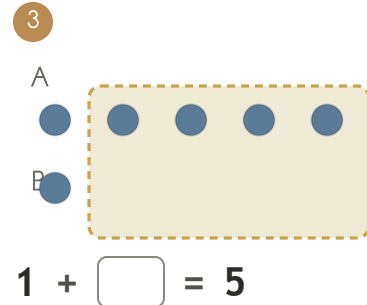
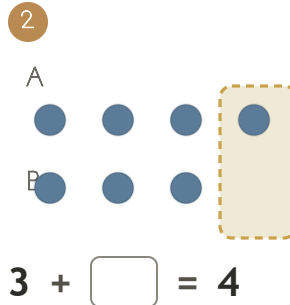
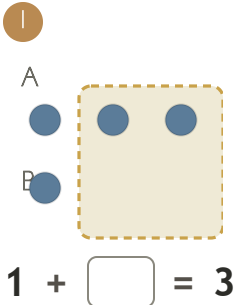
DO THIS Draw more objects until both groups match.

PROVE Add to the smaller group to make them equal.

EXAMPLE



MAKE THEM EQUAL How many more to match?



I compared by: matching counting looking at the rows

TEACHER EDITION

COMPARISON & EQUALITY

QUARTER 1 • WEEK 7

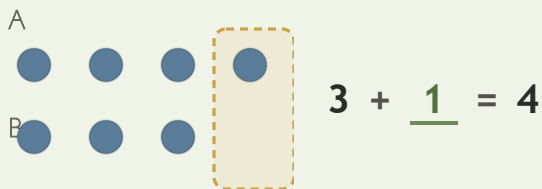
More, Fewer, Same • Prove

Objective: *Make two groups equal to check.*

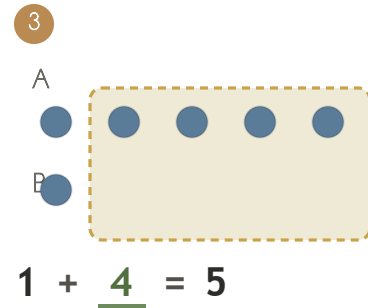
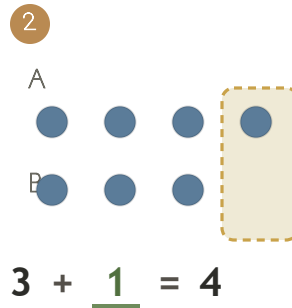
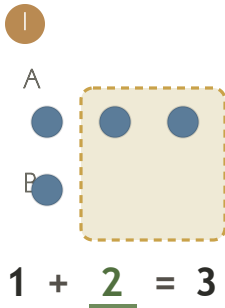
DO THIS Draw more objects until both groups match.

PROVE Add to the smaller group to make them equal.

EXAMPLE



MAKE THEM EQUAL How many more to match?



TEACHER NOTES Answer key & guidance

Answers: see page

Strategy: Accept matching, counting, or rebuilding as valid proof.

Common error: Accepting an answer without checking it.

Prompt: "Show me how you know."

I compared by: matching counting looking at the rows

