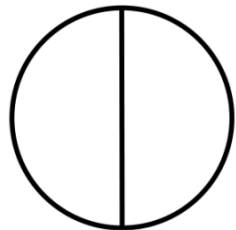


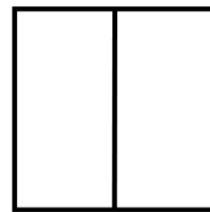
Identifying “halves” and “quarters”

Is the shape split into halves or quarters?

Circle the correct answer.




Halves / Quarters



Halves / Quarters



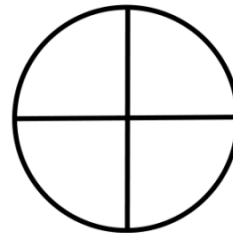
Halves / Quarters




Halves / Quarters



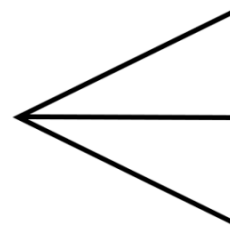
Halves / Quarters



Halves / Quarters



Halves / Quarters



Halves / Quarters