

DATA & GRAPHS

QUARTER 4 • WEEK 34

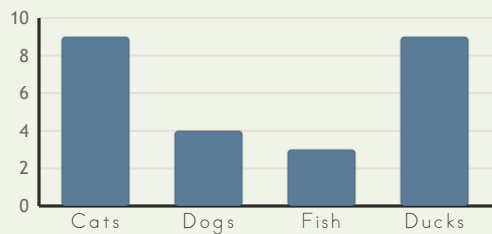
Data and Graphing • Model

Objective: *Sort and graph, then read the graph.*

DO THIS Count each group. Compare the columns.


DISCOVER A graph shows how many in each group.

EXAMPLE



Most: Cats
Fewest: Fish

PICTURE GRAPH Each circle is one.



To compare I used: the columns counting the key

TEACHER EDITION

DATA & GRAPHS

QUARTER 4 • WEEK 34

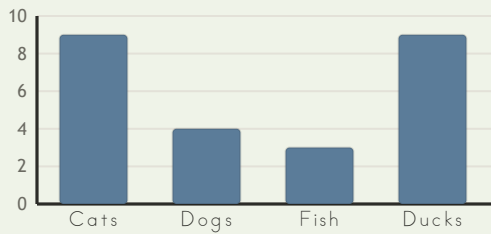
Data and Graphing • Model

Objective: *Sort and graph, then read the graph.*

DO THIS Count each group. Compare the columns.

DISCOVER A graph shows how many in each group.

EXAMPLE



Most: Cats
Fewest: Fish

PICTURE GRAPH Each circle is one.

Cats ● ● ● ● ● ● ● ●

Dogs ● ● ● ●

Fish ● ● ●

Ducks ● ● ● ● ● ● ● ●

TEACHER NOTES Answer key & guidance

Answers: see page
Common error: A model that does not match the labelled number.

Strategy: Have the child build the model before recording.
Prompt: "Show me how you know."

To compare I used: the columns counting the key

