

## COMPARISON & EQUALITY

QUARTER 4 • WEEK 30

Comparison Stories • Fluency


Objective: *Build quick recall with related facts.*


**DO THIS** Complete each set. Look for the pattern.


**STRATEGY** Use what you already know.

Related facts help you remember.

**FACT SETS** Match each group to its numeral

1  →

2 

3  →

4  →

**FACT SETS** One more than each number

$0 + 1 = \square$

$1 + 1 = \square$

$2 + 1 = \square$

$3 + 1 = \square$

$4 + 1 = \square$

$5 + 1 = \square$

$6 + 1 = \square$

$7 + 1 = \square$

**NUMBER TRACK** Fill in the missing numbers.

2 3 4 5 6   9 10

**ACCURACY CHECK** How did you do?

Correct:  Corrected:



TEACHER EDITION

## COMPARISON & EQUALITY

QUARTER 4 • WEEK 30

Comparison Stories • Fluency


Objective: *Build quick recall with related facts.*


**DO THIS** Complete each set. Look for the pattern.


**STRATEGY** Use what you already know.

Related facts help you remember.

**FACT SETS** Match each group to its numeral

1  → 10

2  → \_\_\_\_\_

3  → 1

4  → 4

**FACT SETS** One more than each number

$0 + 1 = \underline{1}$

$1 + 1 = \underline{2}$

$2 + 1 = \underline{3}$

$3 + 1 = \underline{4}$

$4 + 1 = \underline{5}$

$5 + 1 = \underline{6}$

$6 + 1 = \underline{7}$

$7 + 1 = \underline{8}$

**NUMBER TRACK** Fill in the missing numbers.

1
2
3
4
5
6
7
8
9
10

**ACCURACY CHECK** How did you do?

Correct:  Corrected:

