

## NUMERALS & QUANTITY

QUARTER 1 • WEEK 6

Numerals 4 and 5 • Model

Objective: *See, trace, and write each numeral.*

**DO THIS** Trace each numeral. Say its name.


**TRACE THE NUMERALS** Trace each numeral carefully.




**WRITE IT YOURSELF** Now write each numeral.


□ □ □ □ □ □

**COUNT AND WRITE** Write the number for each group.

1  → □

2  → □

3  → □

4  → □

I can:  read it  trace it  write it



TEACHER EDITION

## NUMERALS & QUANTITY

QUARTER 1 • WEEK 6

Numerals 4 and 5 • Model

Objective: *See, trace, and write each numeral.*

**DO THIS** Trace each numeral. Say its name.

**TRACE THE NUMERALS** Trace each numeral carefully.



**WRITE IT YOURSELF** Now write each numeral.

\_\_\_\_\_

**COUNT AND WRITE** Write the number for each group.

1



→

1

2



→

4

3



→

4

4



→

5

**TEACHER NOTES** Answer key & guidance

Answers: see page  
Common error: A model that does not match the labelled number.

Strategy: Have the child build the model before recording.  
Prompt: "Show me how you know."

I can:  read it  trace it  write it

