

GEOMETRY & SHAPES

LABORATORY • L8

Shape Composition • Build


Objective: *Name shapes by their sides and corners.*

DO THIS Name each shape. Count its sides.

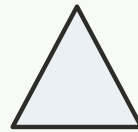
DISCOVER Shapes have sides and corners.



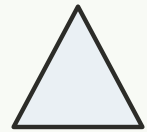
rectangle



circle



triangle



star


COUNT THE SIDES Write how many sides.

1



sides:

2



sides:

3



sides:

4



sides:

I named shapes by: sides corners how they look

TEACHER EDITION

GEOMETRY & SHAPES

LABORATORY · L8

Shape Composition • Build


Objective: *Name shapes by their sides and corners.*

DO THIS Name each shape. Count its sides.

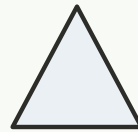
DISCOVER Shapes have sides and corners.



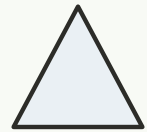
rectangle



circle



triangle



star

COUNT THE SIDES Write how many sides.



sides: 4



sides: 0



sides: 3



sides: 5

TEACHER NOTES Answer key & guidance

Answers: see page
Common error: A model that does not match the labelled number.

Strategy: Have the child build the model before recording.
Prompt: "Show me how you know."

I named shapes by: sides corners how they look

