

GEOMETRY & SHAPES

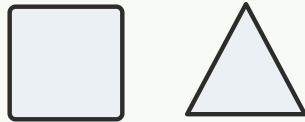
QUARTER 3 • WEEK 27

Geometry and Review • Prove

Objective: *Tell why two shapes are different.*

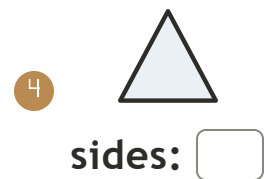

DO THIS Explain how a square and a triangle differ.

PROVE Compare sides and corners.



A square has 4 sides. A triangle has 3.

COUNT AND COMPARE Write the sides for each.



I named shapes by: sides corners how they look

TEACHER EDITION

GEOMETRY & SHAPES

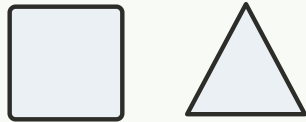
QUARTER 3 • WEEK 27

Geometry and Review • Prove

Objective: *Tell why two shapes are different.*

DO THIS Explain how a square and a triangle differ.

PROVE Compare sides and corners.



A square has 4 sides. A triangle has 3.


COUNT AND COMPARE Write the sides for each.

1



sides: 4

2



sides: 4

3



sides: 4

4



sides: 5

TEACHER NOTES Answer key & guidance

Answers: see page

Strategy: Accept matching, counting, or rebuilding as valid proof.

Common error: Accepting an answer without checking it.

Prompt: "Show me how you know."

I named shapes by: sides corners how they look

