


KINDERGARTEN MASTERY ASSESSMENT 2 OF 8 • QUARTER 2

Quarter 2 • Numerals & Ordering

Objective: *Show what you can do on your own.*


DO THIS Work on your own. Do your best thinking.

COUNT AND WRITE Write the number for each group.

1  →

2  →

3 →

4 

CIRCLE THE NUMBER Circle the matching number.

1  0 1 5

2 6 7 8

3  1 7 9

4  4 6 10

TEACHER EDITION

KINDERGARTEN MASTERY


ASSESSMENT 2 OF 8 • QUARTER 2

Quarter 2 • Numerals & Ordering

Objective: *Show what you can do on your own.*

DO THIS Work on your own. Do your best thinking.

COUNT AND WRITE Write the number for each group.



CIRCLE THE NUMBER Circle the matching number.



TEACHER NOTES Answer key & guidance

Answers: see page
Common error: Treating the picture and the symbol as unrelated.

Strategy: Link the model to the numeral or equation aloud.
Prompt: "Show me how you know."

