

Name: _____

NUMERALS & QUANTITY

QUARTER 1 • WEEK 4

Numerals 0 to 3 • Prove

Objective: *Check a numeral by drawing its amount.*

DO THIS Write the numeral. Draw that many.

PROVE The numeral and the group must match.

EXAMPLE


3

Draw 3.

WRITE AND DRAW Write the numeral, then draw that many.


Draw 3.

1




Draw 3.

2



Draw 3.

3



I can: read it trace it write it



TEACHER EDITION

NUMERALS & QUANTITY

QUARTER 1 • WEEK 4

Numerals 0 to 3 • Prove

Objective: *Check a numeral by drawing its amount.*

DO THIS Write the numeral. Draw that many.

PROVE The numeral and the group must match.

EXAMPLE

3



Draw 3.

WRITE AND DRAW Write the numeral, then draw that many.

Draw 3.

1



Draw 3.

2



Draw 3.

3



TEACHER NOTES Answer key & guidance

Answers: see page

Common error: Accepting an answer without checking it.

Strategy: Accept matching, counting, or rebuilding as valid proof.

Prompt: "Show me how you know."

I can: read it trace it write it

