

**MATH REVIEW**

QUARTER 4 • WEEK 36

Final Mastery Assessment • Connect

Objective: *Review addition.*


**DO THIS** Find each sum.


**ADD** Find each sum.


1  $9 + 1 = \square$       2  $3 + 7 = \square$       3  $8 + 2 = \square$


4  $6 + 4 = \square$       5  $2 + 3 = \square$       6  $6 + 2 = \square$

**COUNT AND WRITE** Write how many.

1  →

2  →

3  →

4  →

I feel:  ready  almost  need help



TEACHER EDITION

## MATH REVIEW

QUARTER 4 • WEEK 36

Final Mastery Assessment • Connect

Objective: *Review addition.*

**DO THIS** Find each sum.

**ADD** Find each sum.

1  $9 + 1 = \underline{10}$

2  $3 + 7 = \underline{10}$

3  $8 + 2 = \underline{10}$


4  $6 + 4 = \underline{10}$


5  $2 + 3 = \underline{5}$


6  $6 + 2 = \underline{8}$

**COUNT AND WRITE** Write how many.

1  → 17

2 

3  → 9

4 

**TEACHER NOTES** Answer key & guidance

Answers: see page  
Common error: Treating the picture and the symbol as unrelated.

Strategy: Link the model to the numeral or equation aloud.  
Prompt: "Show me how you know."

I feel:  ready  almost  need help