

## NUMERALS & QUANTITY

QUARTER 1 • WEEK 6

Numerals 4 and 5 • Apply

Objective: *Use numerals with real groups.*

**DO THIS** Count each group. Circle the right numeral.

**MATCH THE NUMERAL** Circle the matching numeral.

1  0 1 2

2   0 2 3




3 0 2 3

4 3 4 5

**COUNT AND WRITE** Write the number.

1     →

2      →

3    →

4  →

I can:  read it  trace it  write it

TEACHER EDITION

## NUMERALS & QUANTITY

QUARTER 1 • WEEK 6


Numerals 4 and 5 • Apply

Objective: *Use numerals with real groups.*

**DO THIS** Count each group. Circle the right numeral.

**MATCH THE NUMERAL** Circle the matching numeral.

1  0 **1** 2

2   0 **2** 3

3 **0** 2 3

4 **3** 4 5

**COUNT AND WRITE** Write the number.

1     → **4**

2      → **5**

3    → **3**

4  → **1**

**TEACHER NOTES** Answer key & guidance

Answers: see page

Strategy: Read each situation aloud; let the child interpret first.

Common error: Choosing an operation before understanding the situation.

Prompt: "Show me how you know."

I can:  read it  trace it  write it

