

KINDERGARTEN MASTERY ASSESSMENT 6 OF 8 • QUARTER 4

Quarter 4 • Geometry, Measurement or Data


Objective: *Show what you can do on your own.*

DO THIS Work on your own. Do your best thinking.

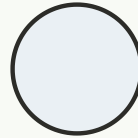
DISCOVER Shapes have sides and corners.



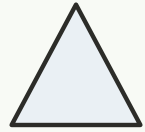
triangle



square



circle



star

COUNT THE SIDES Write how many sides.

1



sides:

2



sides:

3



sides:

4



sides:

TEACHER EDITION

KINDERGARTEN MASTERY ASSESSMENT 6 OF 8 • QUARTER 4

Quarter 4 • Geometry, Measurement or Data


Objective: *Show what you can do on your own.*

DO THIS Work on your own. Do your best thinking.


DISCOVER Shapes have sides and corners.



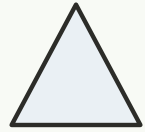
triangle



square



circle



star

COUNT THE SIDES Write how many sides.

1



sides: 3

2



sides: 4

3



sides: 0

4



sides: 5

TEACHER NOTES Answer key & guidance

Answers: see page
Common error: A model that does not match the labelled number.

Strategy: Have the child build the model before recording.
Prompt: "Show me how you know."