

# ADDITION FACTS

## Doubles & Sums to 20

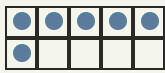
**Objective:** Add small numbers. Learn your doubles so you just know them.

### INSTRUCTION

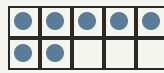
Count both groups, then write how many in all. Learn your doubles so you just know them!

### EXAMPLE

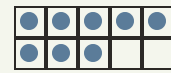
A double is a number added to itself.



$$3 + 3 = 6$$



$$5 + 2 = 7$$



$$4 + 4 = 8$$

### INDEPENDENT PRACTICE

Write each sum. Watch for your doubles!

1.  $1 + 1 = \square$

2.  $2 + 2 = \square$

3.  $3 + 3 = \square$

4.  $4 + 4 = \square$

5.  $5 + 5 = \square$

6.  $6 + 6 = \square$

7.  $7 + 7 = \square$

8.  $8 + 8 = \square$

9.  $9 + 9 = \square$

10.  $10 + 10 = \square$

11.  $10 + 4 = \square$

12.  $7 + 3 = \square$

13.  $2 + 7 = \square$

14.  $8 + 3 = \square$

15.  $5 + 2 = \square$

16.  $6 + 10 = \square$

17.  $2 + 4 = \square$

18.  $9 + 1 = \square$

19.  $6 + 4 = \square$

20.  $1 + 9 = \square$

21.  $9 + 2 = \square$

22.  $1 + 3 = \square$

23.  $2 + 3 = \square$

24.  $5 + 10 = \square$

25.  $9 + 10 = \square$

26.  $1 + 2 = \square$

27.  $4 + 6 = \square$

28.  $2 + 8 = \square$

29.  $5 + 6 = \square$

30.  $4 + 1 = \square$

I solved by:  counted on  knew my double  used a ten frame

TEACHER EDITION

# ADDITION FACTS

## Doubles & Sums to 20

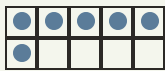
**Objective:** Add small numbers. Learn your doubles so you just know them.

**INSTRUCTION**

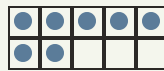
Count both groups, then write how many in all. Learn your doubles so you just know them!

**EXAMPLE**

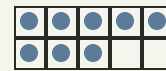
A double is a number added to itself.



$3 + 3 = 6$



$5 + 2 = 7$



$4 + 4 = 8$

**INDEPENDENT PRACTICE**

Write each sum. Watch for your doubles!

1.  $1 + 1 =$

2.  $2 + 2 =$

3.  $3 + 3 =$

4.  $4 + 4 =$

5.  $5 + 5 =$

6.  $6 + 6 =$

7.  $7 + 7 =$

8.  $8 + 8 =$

9.  $9 + 9 =$

10.  $10 + 10 =$

11.  $10 + 4 =$

12.  $7 + 3 =$

13.  $2 + 7 =$

14.  $8 + 3 =$

15.  $5 + 2 =$

16.  $6 + 10 =$

17.  $2 + 4 =$

18.  $9 + 1 =$

19.  $6 + 4 =$

20.  $1 + 9 =$

21.  $9 + 2 =$

22.  $1 + 3 =$

23.  $2 + 3 =$

24.  $5 + 10 =$

25.  $9 + 10 =$

26.  $1 + 2 =$

27.  $4 + 6 =$

28.  $2 + 8 =$

29.  $5 + 6 =$

30.  $4 + 1 =$

I solved by:  counted on  knew my double  used a ten frame