

GEOMETRY & SHAPES


QUARTER 3 • WEEK 27

Geometry and Review • Model

Objective: *Name shapes by their sides and corners.*

DO THIS Name each shape. Count its sides.


DISCOVER Shapes have sides and corners.



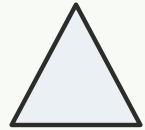
circle



rectangle



square



star

COUNT THE SIDES Write how many sides.



sides:



sides:



sides:



sides:

I named shapes by: sides corners how they look

TEACHER EDITION

GEOMETRY & SHAPES


QUARTER 3 • WEEK 27

Geometry and Review • Model

Objective: *Name shapes by their sides and corners.*

DO THIS Name each shape. Count its sides.

DISCOVER Shapes have sides and corners.



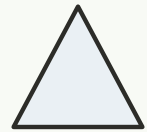
circle



rectangle




square



star

COUNT THE SIDES Write how many sides.



sides: 0



sides: 4



sides: 4



sides: 5

TEACHER NOTES Answer key & guidance

Answers: see page
Common error: A model that does not match the labelled number.

Strategy: Have the child build the model before recording.
Prompt: "Show me how you know."

I named shapes by: sides corners how they look