

MEASUREMENT & TIME

QUARTER 4 • WEEK 32

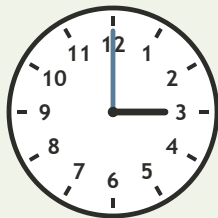
Time and Sequence • Discover

Objective: *Read time to the hour.*

DO THIS Look at the hour hand. Write the time.

DISCOVER The short hand shows the hour.


EXAMPLE



3 : 00


READ THE CLOCK Write the time to the hour.

1




_____ : 00

2




_____ : 00

3



_____ : 00

4



_____ : 00

I compared: length time value

TEACHER EDITION

MEASUREMENT & TIME

QUARTER 4 • WEEK 32


Time and Sequence • Discover

Objective: *Read time to the hour.*

DO THIS Look at the hour hand. Write the time.

DISCOVER The short hand shows the hour.


EXAMPLE



3 : 00


READ THE CLOCK Write the time to the hour.

1




1:00

2




3:00

3



11:00

4



6:00

TEACHER NOTES Answer key & guidance

Answers: see page

Common error: Counting objects more than once or skipping objects.

Strategy: Introduce with the manipulatives named below.

Prompt: "Show me how you know."

I compared: length time value

