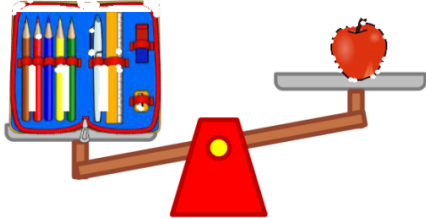
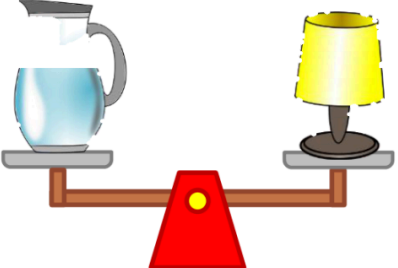
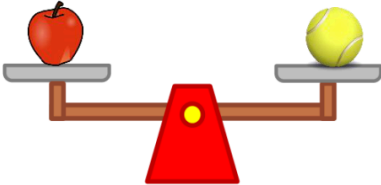
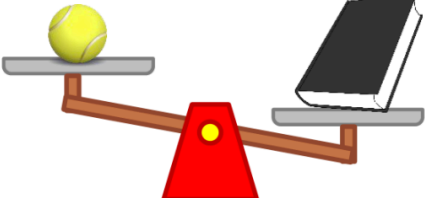




Heavier / lighter with a balance scale

Circle the correct answers.

 <p>Which is lighter?</p>	 <p>Which is heavier?</p>
<p>Apple Pencil case Same</p>	<p>Pitcher Lamp Same</p>
 <p>Which is lighter?</p>	 <p>Which is heavier?</p>
<p>Apple Tennis ball Same</p>	<p>Tennis ball Book Same</p>
 <p>Which is heavier?</p>	 <p>Which is lighter?</p>
<p>Book Lamp Same</p>	<p>Pencil Case Book Same</p>

Which is heavier: the pitcher or the pencil case? _____

Which is lighter: the book or the apple? _____