
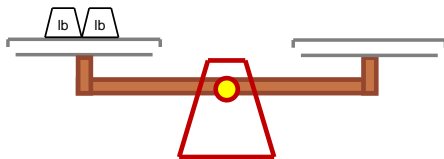


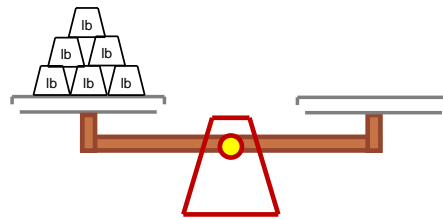
Measure weights in pounds

Grade 2 Measurement Worksheet

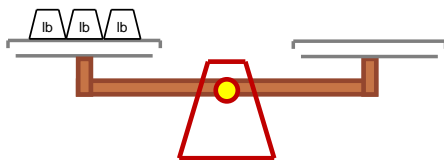
 = 1 pound



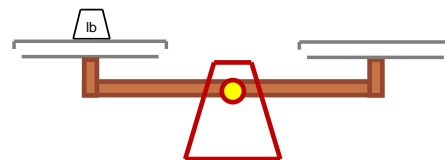
The book weighs \_\_\_\_ pounds.



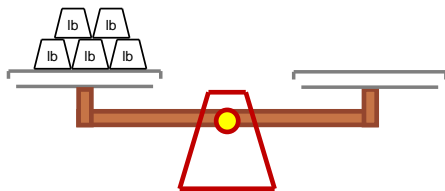
The hammer weighs \_\_\_\_ pounds.



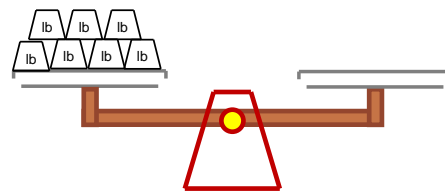
The laptop weighs \_\_\_\_ pounds.



The bread weighs \_\_\_\_ pound.



The toy truck weighs \_\_\_\_ pounds.



The cake weighs \_\_\_\_ pounds.

How much heavier is the book than the bread? \_\_\_\_\_

How much heavier is the cake than the laptop? \_\_\_\_\_