




$$6 \times 2 = 12$$


Circle the group that matches the equation.

$$6 \times 2 = 12$$





How many cherries are there in that group? _____

$$2 \times 3 = 6$$



How many penguins are there in that group? _____

$$4 \times 4 = 16$$



How many bananas are there in that group? _____