

COMPOSE & DECOMPOSE

QUARTER 3 • WEEK 23

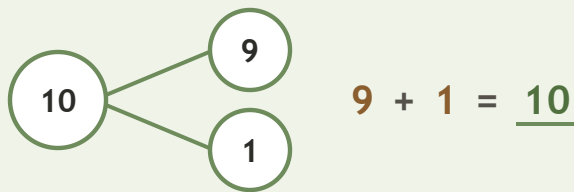
Make 10 • Prove

Objective: *Prove the parts rebuild the whole.*

DO THIS Add the two parts. Do they make the whole?

PROVE Put the parts together.

EXAMPLE



COMPLETE AND CHECK Find the part, then check.


1 $5 + \square = 10$
 $10 - 5 = \square$

2 $6 + \square = 10$
 $10 - 6 = \square$

3 $3 + \square = 10$
 $10 - 3 = \square$


ON THE FRAME Build the whole two ways.

1



$4 + \square = 10$

2



$3 + \square = 10$

Two parts make: the same whole different ways ten

COMPOSE & DECOMPOSE

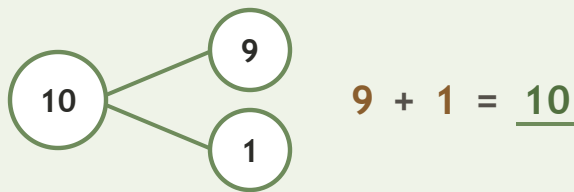
Make 10 • Prove

Objective: *Prove the parts rebuild the whole.*

DO THIS Add the two parts. Do they make the whole?

PROVE Put the parts together.

EXAMPLE



COMPLETE AND CHECK Find the part, then check.

1

$$5 + \underline{5} = 10$$

$$10 - 5 = \underline{5}$$

2

$$6 + \underline{4} = 10$$

$$10 - 6 = \underline{4}$$


3

$$3 + \underline{7} = 10$$

$$10 - 3 = \underline{7}$$


ON THE FRAME Build the whole two ways.

1



$$4 + \underline{6} = 10$$

2



$$3 + \underline{7} = 10$$

TEACHER NOTES Answer key & guidance

Answers: see page

Common error: Accepting an answer without checking it.

Strategy: Accept matching, counting, or rebuilding as valid proof.

Prompt: "Show me how you know."

Two parts make: the same whole different ways ten