

## COMPARISON & EQUALITY

QUARTER 1 • WEEK 7

More, Fewer, Same • Fluency


Objective: *Build quick recall with related facts.*

**DO THIS** Complete each set. Look for the pattern.


**STRATEGY** Use what you already know.


Related facts help you remember.

**FACT SETS** Match each group to its numeral

1  →

2  →

3  →

4  →

**FACT SETS** One more than each number

$0 + 1 = \square$

$1 + 1 = \square$

$2 + 1 = \square$

$3 + 1 = \square$

$4 + 1 = \square$

**NUMBER TRACK** Fill in the missing numbers.

2 3 4 5   8 9 10

**ACCURACY CHECK** How did you do?

Correct:  Corrected:



TEACHER EDITION

## COMPARISON & EQUALITY

QUARTER 1 • WEEK 7

More, Fewer, Same • Fluency


Objective: *Build quick recall with related facts.*

**DO THIS** Complete each set. Look for the pattern.


**STRATEGY** Use what you already know.

Related facts help you remember.

**FACT SETS** Match each group to its numeral

1  →

2  →

3  →

4  →

**FACT SETS** One more than each number

$0 + 1 = \underline{1}$

$1 + 1 = \underline{2}$

$2 + 1 = \underline{3}$

$3 + 1 = \underline{4}$

$4 + 1 = \underline{5}$

**NUMBER TRACK** Fill in the missing numbers.

**ACCURACY CHECK** How did you do?

Correct:  Corrected:

