


$$3 \times 8 = 24$$


Circle the group that matches the equation.

$$3 \times 8 = 24$$




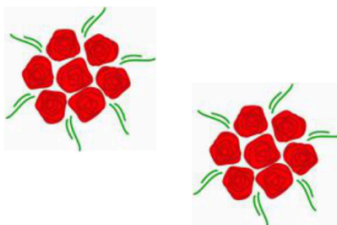

How many spider legs are there in that group? _____

$$3 \times 3 = 9$$



How many balloons are there in that group? _____

$$4 \times 7 = 28$$



How many roses are there in that group? _____