

COUNTING & CARDINALITY

QUARTER 2 • WEEK 10


Count 6 and 7 • Fluency


Objective: *Build quick recall with related facts.*


DO THIS Complete each set. Look for the pattern.


STRATEGY Use what you already know.
 Related facts help you remember.

FACT SETS Match each group to its numeral

1  →

2  →

3  →

4  →

FACT SETS One more than each number

$0 + 1 = \square$	$1 + 1 = \square$	$2 + 1 = \square$	$3 + 1 = \square$
$4 + 1 = \square$	$5 + 1 = \square$	$6 + 1 = \square$	

NUMBER TRACK Fill in the missing numbers.

1 2 3 4 8 9 10

ACCURACY CHECK How did you do?

Correct: Corrected:



TEACHER EDITION

COUNTING & CARDINALITY

QUARTER 2 • WEEK 10

Count 6 and 7 • Fluency


Objective: *Build quick recall with related facts.*

DO THIS Complete each set. Look for the pattern.


STRATEGY Use what you already know.


Related facts help you remember.

FACT SETS Match each group to its numeral

1  → 6

2  → 4

3  → 6

4  → 1

FACT SETS One more than each number

$0 + 1 = \underline{1}$

$1 + 1 = \underline{2}$

$2 + 1 = \underline{3}$

$3 + 1 = \underline{4}$

$4 + 1 = \underline{5}$

$5 + 1 = \underline{6}$

$6 + 1 = \underline{7}$

NUMBER TRACK Fill in the missing numbers.

1

2

3

4

5

6

7

8

9

10

ACCURACY CHECK How did you do?

Correct:

Corrected:

