










Lines, segments and rays

Write "**line**", "**line segment**" or "**ray**" below each picture.

Lines go in both directions forever.
Line segments end in fixed points on both sides.
Rays start at a point and go forever in one direction.

		
<input style="width: 150px; height: 30px; border: 1px solid black; border-radius: 5px;" type="text"/>	<input style="width: 150px; height: 30px; border: 1px solid black; border-radius: 5px;" type="text"/>	<input style="width: 150px; height: 30px; border: 1px solid black; border-radius: 5px;" type="text"/>
		
<input style="width: 150px; height: 30px; border: 1px solid black; border-radius: 5px;" type="text"/>	<input style="width: 150px; height: 30px; border: 1px solid black; border-radius: 5px;" type="text"/>	<input style="width: 150px; height: 30px; border: 1px solid black; border-radius: 5px;" type="text"/>
		
<input style="width: 150px; height: 30px; border: 1px solid black; border-radius: 5px;" type="text"/>	<input style="width: 150px; height: 30px; border: 1px solid black; border-radius: 5px;" type="text"/>	<input style="width: 150px; height: 30px; border: 1px solid black; border-radius: 5px;" type="text"/>

Draw the following.

Line	Line segment	Ray