

ADDITION FACTS

Doubles & Sums to 20

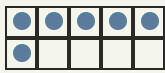
Objective: Add small numbers. Learn your doubles so you just know them.

INSTRUCTION

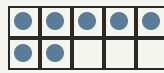
Count both groups, then write how many in all. Learn your doubles so you just know them!

EXAMPLE

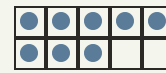
A double is a number added to itself.



$$3 + 3 = 6$$



$$5 + 2 = 7$$



$$4 + 4 = 8$$

INDEPENDENT PRACTICE

Write each sum. Watch for your doubles!

1. $1 + 1 = \square$

2. $2 + 2 = \square$

3. $3 + 3 = \square$

4. $4 + 4 = \square$

5. $5 + 5 = \square$

6. $6 + 6 = \square$

7. $7 + 7 = \square$

8. $8 + 8 = \square$

9. $9 + 9 = \square$

10. $10 + 10 = \square$

11. $1 + 4 = \square$

12. $2 + 7 = \square$

13. $10 + 9 = \square$

14. $3 + 8 = \square$

15. $10 + 5 = \square$

16. $5 + 10 = \square$

17. $10 + 1 = \square$

18. $5 + 4 = \square$

19. $1 + 2 = \square$

20. $7 + 1 = \square$

21. $5 + 6 = \square$

22. $7 + 5 = \square$

23. $7 + 2 = \square$

24. $3 + 1 = \square$

25. $6 + 4 = \square$

26. $7 + 4 = \square$

27. $2 + 3 = \square$

28. $2 + 8 = \square$

29. $4 + 5 = \square$

30. $8 + 3 = \square$

I solved by: counted on knew my double used a ten frame

TEACHER EDITION

ADDITION FACTS

Doubles & Sums to 20

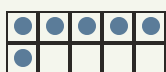
Objective: Add small numbers. Learn your doubles so you just know them.

INSTRUCTION

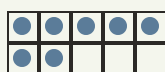
Count both groups, then write how many in all. Learn your doubles so you just know them!

EXAMPLE

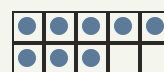
A double is a number added to itself.



$3 + 3 = 6$



$5 + 2 = 7$



$4 + 4 = 8$

INDEPENDENT PRACTICE

Write each sum. Watch for your doubles!

1. $1 + 1 = 2$

2. $2 + 2 = 4$

3. $3 + 3 = 6$

4. $4 + 4 = 8$

5. $5 + 5 = 10$

6. $6 + 6 = 12$

7. $7 + 7 = 14$

8. $8 + 8 = 16$

9. $9 + 9 = 18$

10. $10 + 10 = 20$

11. $1 + 4 = 5$

12. $2 + 7 = 9$

13. $10 + 9 = 19$

14. $3 + 8 = 11$

15. $10 + 5 = 15$

16. $5 + 10 = 15$

17. $10 + 1 = 11$

18. $5 + 4 = 9$

19. $1 + 2 = 3$

20. $7 + 1 = 8$

21. $5 + 6 = 11$

22. $7 + 5 = 12$

23. $7 + 2 = 9$

24. $3 + 1 = 4$

25. $6 + 4 = 10$

26. $7 + 4 = 11$

27. $2 + 3 = 5$

28. $2 + 8 = 10$

29. $4 + 5 = 9$

30. $8 + 3 = 11$

I solved by: counted on knew my double used a ten frame