

ADDITION FACTS

Doubles & Sums to 20

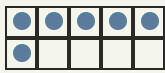
Objective: Add small numbers. Learn your doubles so you just know them.

INSTRUCTION

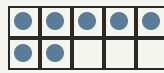
Count both groups, then write how many in all. Learn your doubles so you just know them!

EXAMPLE

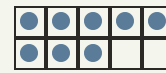
A double is a number added to itself.



$$3 + 3 = 6$$



$$5 + 2 = 7$$



$$4 + 4 = 8$$

INDEPENDENT PRACTICE

Write each sum. Watch for your doubles!

1. $1 + 1 = \square$

2. $2 + 2 = \square$

3. $3 + 3 = \square$

4. $4 + 4 = \square$

5. $5 + 5 = \square$

6. $6 + 6 = \square$

7. $7 + 7 = \square$

8. $8 + 8 = \square$

9. $9 + 9 = \square$

10. $10 + 10 = \square$

11. $9 + 10 = \square$

12. $4 + 9 = \square$

13. $7 + 5 = \square$

14. $6 + 1 = \square$

15. $5 + 4 = \square$

16. $1 + 8 = \square$

17. $2 + 1 = \square$

18. $4 + 8 = \square$

19. $1 + 5 = \square$

20. $10 + 2 = \square$

21. $10 + 9 = \square$

22. $2 + 5 = \square$

23. $10 + 8 = \square$

24. $5 + 6 = \square$

25. $10 + 5 = \square$

26. $7 + 3 = \square$

27. $6 + 9 = \square$

28. $9 + 4 = \square$

29. $8 + 6 = \square$

30. $7 + 9 = \square$

I solved by: counted on knew my double used a ten frame

TEACHER EDITION

ADDITION FACTS

Doubles & Sums to 20

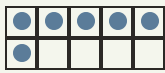
Objective: Add small numbers. Learn your doubles so you just know them.

INSTRUCTION

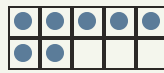
Count both groups, then write how many in all. Learn your doubles so you just know them!

EXAMPLE

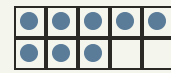
A double is a number added to itself.



$$3 + 3 = 6$$



$$5 + 2 = 7$$



$$4 + 4 = 8$$

INDEPENDENT PRACTICE

Write each sum. Watch for your doubles!

1. $1 + 1 = \boxed{2}$

2. $2 + 2 = \boxed{4}$

3. $3 + 3 = \boxed{6}$

4. $4 + 4 = \boxed{8}$

5. $5 + 5 = \boxed{10}$

6. $6 + 6 = \boxed{12}$

7. $7 + 7 = \boxed{14}$

8. $8 + 8 = \boxed{16}$

9. $9 + 9 = \boxed{18}$

10. $10 + 10 = \boxed{20}$

11. $9 + 10 = \boxed{19}$

12. $4 + 9 = \boxed{13}$

13. $7 + 5 = \boxed{12}$

14. $6 + 1 = \boxed{7}$

15. $5 + 4 = \boxed{9}$

16. $1 + 8 = \boxed{9}$

17. $2 + 1 = \boxed{3}$

18. $4 + 8 = \boxed{12}$

19. $1 + 5 = \boxed{6}$

20. $10 + 2 = \boxed{12}$

21. $10 + 9 = \boxed{19}$

22. $2 + 5 = \boxed{7}$

23. $10 + 8 = \boxed{18}$

24. $5 + 6 = \boxed{11}$

25. $10 + 5 = \boxed{15}$

26. $7 + 3 = \boxed{10}$

27. $6 + 9 = \boxed{15}$

28. $9 + 4 = \boxed{13}$

29. $8 + 6 = \boxed{14}$

30. $7 + 9 = \boxed{16}$

I solved by: counted on knew my double used a ten frame