

## MEASUREMENT & TIME

QUARTER 3 • WEEK 26

Measurement and Data • Fluency



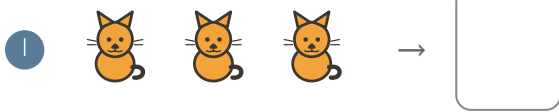
Objective: *Build quick recall with related facts.*

**DO THIS** Complete each set. Look for the pattern.

**STRATEGY** Use what you already know.

Related facts help you remember.

**FACT SETS** Match each group to its numeral



**FACT SETS** One more than each number

$0 + 1 = \square$

$1 + 1 = \square$

$2 + 1 = \square$

$3 + 1 = \square$

$4 + 1 = \square$

$5 + 1 = \square$

$6 + 1 = \square$

$7 + 1 = \square$

**NUMBER TRACK** Fill in the missing numbers.

1 2 3 4  6  8  10

**ACCURACY CHECK** How did you do?

Correct:  Corrected:



TEACHER EDITION

## MEASUREMENT & TIME

QUARTER 3 • WEEK 26

Measurement and Data • Fluency




Objective: *Build quick recall with related facts.*

**DO THIS** Complete each set. Look for the pattern.

**STRATEGY** Use what you already know.

Related facts help you remember.

**FACT SETS** Match each group to its numeral



**FACT SETS** One more than each number

$0 + 1 = \underline{1}$

$1 + 1 = \underline{2}$

$2 + 1 = \underline{3}$

$3 + 1 = \underline{4}$

$4 + 1 = \underline{5}$

$5 + 1 = \underline{6}$

$6 + 1 = \underline{7}$

$7 + 1 = \underline{8}$

**NUMBER TRACK** Fill in the missing numbers.

1 2 3 4 5 6 7 8 9 10

**ACCURACY CHECK** How did you do?

Correct:  Corrected:

