


Meaning of multiplication sentences

Write the equation that describes how many objects there are.




___ X ___ = ___

How many cherries are there?



___ X ___ = ___

How many spider legs are there?




___ X ___ = ___

How many penguins are there?



___ X ___ = ___

How many flowers are there?



___ X ___ = ___

How many balloons are there?



___ X ___ = ___

How many candies are there?
