

NUMERALS & QUANTITY

LABORATORY · L3

Numeral Formation • Explore

Objective: *See, trace, and write each numeral.*

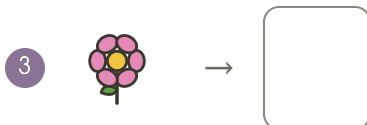


DO THIS Trace each numeral. Say its name.

TRACE THE NUMERALS Trace each numeral carefully.



WRITE IT YOURSELF Now write each numeral.

COUNT AND WRITE Write the number for each group.



I can: read it trace it write it

TEACHER EDITION

NUMERALS & QUANTITY

LABORATORY · L3

Numeral Formation • Explore

Objective: *See, trace, and write each numeral.*


DO THIS Trace each numeral. Say its name.


TRACE THE NUMERALS Trace each numeral carefully.




WRITE IT YOURSELF Now write each numeral.

COUNT AND WRITE Write the number for each group.

1  → 8

2  → _____

3  → 1

4  → 2

TEACHER NOTES Answer key & guidance

Answers: see page
Common error: Counting objects more than once or skipping objects.

Strategy: Introduce with the manipulatives named below.
Prompt: "Show me how you know."

I can: read it trace it write it