


KINDERGARTEN MASTERY ASSESSMENT 2 OF 8 • QUARTER 2


Quarter 2 • Numerals & Ordering


Objective: *Show what you can do on your own.*


DO THIS Work on your own. Do your best thinking.

COUNT AND WRITE Write the number for each group.


1  →

2  _____

3  →

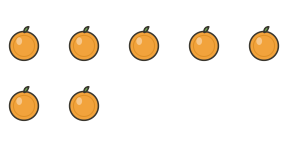
4  _____

CIRCLE THE NUMBER Circle the matching number.

1  7 8 9

2  0 1 9

3  6 8 10

4  7 8 9

TEACHER EDITION

KINDERGARTEN MASTERY


ASSESSMENT 2 OF 8 • QUARTER 2


Quarter 2 • Numerals & Ordering


Objective: *Show what you can do on your own.*


DO THIS Work on your own. Do your best thinking.

COUNT AND WRITE Write the number for each group.

1  →

2  _____

3  →

4  _____

CIRCLE THE NUMBER Circle the matching number.

1  7 8 9

2  0 1

3  8 10

4  8 9

TEACHER NOTES Answer key & guidance

Answers: see page
Common error: Treating the picture and the symbol as unrelated.

Strategy: Link the model to the numeral or equation aloud.
Prompt: "Show me how you know."