

ADDITION FACTS

Doubles & Sums to 20

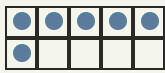
Objective: Add small numbers. Learn your doubles so you just know them.

INSTRUCTION

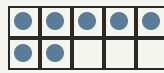
Count both groups, then write how many in all. Learn your doubles so you just know them!

EXAMPLE

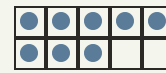
A double is a number added to itself.



$$3 + 3 = 6$$



$$5 + 2 = 7$$



$$4 + 4 = 8$$

INDEPENDENT PRACTICE

Write each sum. Watch for your doubles!

1. $1 + 1 = \square$

2. $2 + 2 = \square$

3. $3 + 3 = \square$

4. $4 + 4 = \square$

5. $5 + 5 = \square$

6. $6 + 6 = \square$

7. $7 + 7 = \square$

8. $8 + 8 = \square$

9. $9 + 9 = \square$

10. $10 + 10 = \square$

11. $3 + 8 = \square$

12. $5 + 9 = \square$

13. $3 + 6 = \square$

14. $6 + 4 = \square$

15. $5 + 7 = \square$

16. $10 + 9 = \square$

17. $4 + 5 = \square$

18. $9 + 8 = \square$

19. $5 + 3 = \square$

20. $5 + 8 = \square$

21. $3 + 7 = \square$

22. $5 + 10 = \square$

23. $9 + 5 = \square$

24. $3 + 5 = \square$

25. $10 + 2 = \square$

26. $9 + 7 = \square$

27. $7 + 6 = \square$

28. $7 + 9 = \square$

29. $7 + 8 = \square$

30. $6 + 2 = \square$

I solved by: counted on knew my double used a ten frame

TEACHER EDITION

ADDITION FACTS

Doubles & Sums to 20

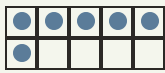
Objective: Add small numbers. Learn your doubles so you just know them.

INSTRUCTION

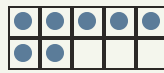
Count both groups, then write how many in all. Learn your doubles so you just know them!

EXAMPLE

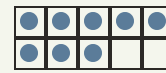
A double is a number added to itself.



$$3 + 3 = 6$$



$$5 + 2 = 7$$



$$4 + 4 = 8$$

INDEPENDENT PRACTICE

Write each sum. Watch for your doubles!

1. $1 + 1 =$

2. $2 + 2 =$

3. $3 + 3 =$

4. $4 + 4 =$

5. $5 + 5 =$

6. $6 + 6 =$

7. $7 + 7 =$

8. $8 + 8 =$

9. $9 + 9 =$

10. $10 + 10 =$

11. $3 + 8 =$

12. $5 + 9 =$

13. $3 + 6 =$

14. $6 + 4 =$

15. $5 + 7 =$

16. $10 + 9 =$

17. $4 + 5 =$

18. $9 + 8 =$

19. $5 + 3 =$

20. $5 + 8 =$

21. $3 + 7 =$

22. $5 + 10 =$

23. $9 + 5 =$

24. $3 + 5 =$

25. $10 + 2 =$

26. $9 + 7 =$

27. $7 + 6 =$

28. $7 + 9 =$

29. $7 + 8 =$

30. $6 + 2 =$

I solved by: counted on knew my double used a ten frame