

## GEOMETRY & SHAPES

QUARTER 3 • WEEK 27

Geometry and Review • Model


Objective: *Name shapes by their sides and corners.*

**DO THIS** Name each shape. Count its sides.

**DISCOVER** Shapes have sides and corners.



star



circle



square



rectangle


**COUNT THE SIDES** Write how many sides.

1



sides:

2



sides:

3



sides:

4



sides:

I named shapes by:  sides  corners  how they look

TEACHER EDITION

## GEOMETRY & SHAPES

QUARTER 3 • WEEK 27

Geometry and Review • Model


Objective: *Name shapes by their sides and corners.*

**DO THIS** Name each shape. Count its sides.

**DISCOVER** Shapes have sides and corners.



star



circle



square



rectangle

**COUNT THE SIDES** Write how many sides.



sides: 5



sides: 0



sides: 4



sides: 4

**TEACHER NOTES** Answer key & guidance

Answers: see page  
Common error: A model that does not match the labelled number.

Strategy: Have the child build the model before recording.  
Prompt: "Show me how you know."

I named shapes by:  sides  corners  how they look

