

## RELATIONAL ADDITION

QUARTER 3 • WEEK 24

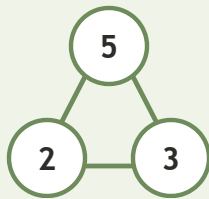
Addition Strategy Paths • Connect

Objective: *Connect addition to its number family.*

**DO THIS** Use the three numbers to write the fact.

**CONNECT** Whole and two parts.

**EXAMPLE**



**NUMBER FAMILIES** Write the fact.

1

$3 + 5 = \square$

2

$7 + 2 = \square$

3

$1 + 7 = \square$

4

$4 + 2 = \square$

To add I:  counted all  counted on  made ten

TEACHER EDITION

## RELATIONAL ADDITION

QUARTER 3 • WEEK 24

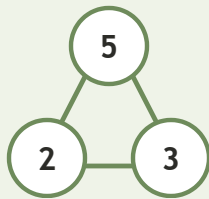
Addition Strategy Paths • Connect

Objective: *Connect addition to its number family.*

**DO THIS** Use the three numbers to write the fact.

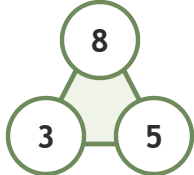
**CONNECT** Whole and two parts.

EXAMPLE



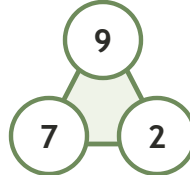
**NUMBER FAMILIES** Write the fact.

1



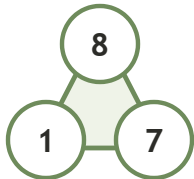
$$3 + 5 = \underline{8}$$

2



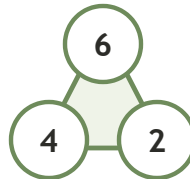
$$7 + 2 = \underline{9}$$

3



$$1 + 7 = \underline{8}$$

4



$$4 + 2 = \underline{6}$$

**TEACHER NOTES** Answer key & guidance

Answers: see page  
Common error: Treating the picture and the symbol as unrelated.

Strategy: Link the model to the numeral or equation aloud.  
Prompt: "Show me how you know."

To add I:  counted all  counted on  made ten

