

## MEASUREMENT & TIME

QUARTER 4 • WEEK 33

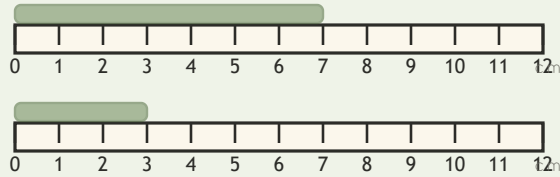
Money and Measurement • Strategy

Objective: *Compare lengths directly.*

**DO THIS** Find which is longer and which is shorter.

**DISCOVER** Line up the ends to compare.

**EXAMPLE**



$$7 > 3$$

7 cm is longer

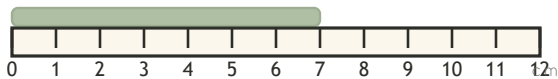
**COMPARE LENGTHS** Longer or shorter?

1



Longer or shorter than 5 cm?

2



Longer or shorter than 5 cm?

I compared:  length  time  value

TEACHER EDITION

## MEASUREMENT & TIME

QUARTER 4 • WEEK 33

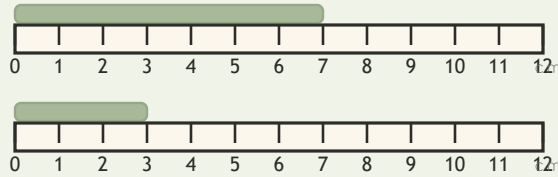
Money and Measurement • Strategy

Objective: *Compare lengths directly.*

**DO THIS** Find which is longer and which is shorter.

**DISCOVER** Line up the ends to compare.

**EXAMPLE**

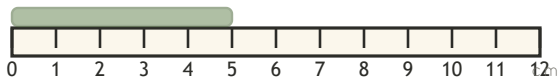


$$7 > 3$$

7 cm is longer

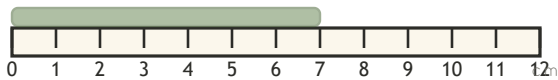
**COMPARE LENGTHS** Longer or shorter?

1



Longer or shorter than 5 cm?

2



Longer or shorter than 5 cm?

**TEACHER NOTES** Answer key & guidance

Answers: see page

Strategy: Name the strategy and model the worked path first.

Common error: Reverting to count-all instead of the new strategy.

Prompt: "Show me how you know."

I compared:  length  time  value

