

KINDERGARTEN MASTERY


ASSESSMENT 2 OF 8 • QUARTER 2

Quarter 2 • Numerals & Ordering


Objective: *Show what you can do on your own.*


DO THIS Work on your own. Do your best thinking.

COUNT AND WRITE Write the number for each group.

1  →

2  →

3  →


4  →

CIRCLE THE NUMBER Circle the matching number.

1  1 2 3

2  0 5 8

3  1 3 6

4  3 4 10

TEACHER EDITION

KINDERGARTEN MASTERY


ASSESSMENT 2 OF 8 • QUARTER 2

Quarter 2 • Numerals & Ordering


Objective: *Show what you can do on your own.*


DO THIS Work on your own. Do your best thinking.

COUNT AND WRITE Write the number for each group.

1  → 1

2  → 3

3  → 10


4  → 3

CIRCLE THE NUMBER Circle the matching number.

1  1 2 3

2  0 5 8

3  1 3 6

4  3 4 10

TEACHER NOTES Answer key & guidance

Answers: see page
Common error: Treating the picture and the symbol as unrelated.

Strategy: Link the model to the numeral or equation aloud.
Prompt: "Show me how you know."

